

Welche Rechenzeichen
hat der Troll

unter den Steinen versteckt ?

Addition, Subtraktion und Multiplikation
im ZR 100

Bilder: KeepinitKawaiiDesign



$$18 \text{ } \bullet \text{ } 35 \text{ } \bullet \text{ } 42 = 95$$



$$90 \text{ } \bullet \text{ } 3 \text{ } \bullet \text{ } 4 = 78$$



$$7 \text{ } \bullet \text{ } 8 \text{ } \bullet \text{ } 14 = 42$$



$$90 \text{ } \bullet \text{ } 15 \text{ } \bullet \text{ } 28 = 47$$



$$81 \text{ } \bullet \text{ } 4 \text{ } \bullet \text{ } 7 = 53$$



$$49 \text{ } \bullet \text{ } 28 \text{ } \bullet \text{ } 39 = 38$$



$$16 \text{ } \bullet \text{ } 9 \text{ } \bullet \text{ } 7 = 79$$






$$28 \ominus 5 \ominus 8 = 68$$




$$26 \ominus 19 \ominus 39 = 84$$




$$9 \ominus 6 \ominus 13 = 41$$




$$72 \ominus 18 \ominus 15 = 69$$




$$46 \ominus 38 \ominus 13 = 71$$




$$6 \ominus 5 \ominus 48 = 78$$




$$5 \ominus 7 \ominus 18 = 17$$

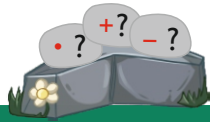



$$72 \ominus 15 \ominus 19 = 38$$





$45 \ominus 7 \ominus 7 = 94$



$28 \ominus 38 \ominus 19 = 47$



$88 \ominus 19 \ominus 18 = 87$



$9 \ominus 6 \ominus 15 = 69$



$17 \ominus 16 \ominus 18 = 51$



$62 \ominus 3 \ominus 5 = 47$

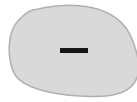
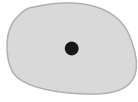
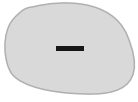
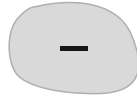
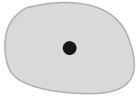
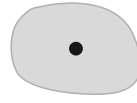
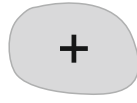


$91 \ominus 38 \ominus 26 = 79$

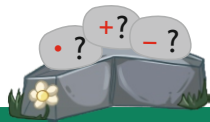


$7 \ominus 8 \ominus 19 = 37$






$$49 \ominus 38 \ominus 17 = 70$$




$$51 \ominus 4 \ominus 6 = 27$$




$$4 \ominus 7 \ominus 26 = 54$$




$$60 \ominus 18 \ominus 17 = 25$$




$$58 \ominus 6 \ominus 3 = 40$$




$$26 \ominus 14 \ominus 58 = 70$$




$$6 \ominus 7 \ominus 13 = 55$$



