






Welche Rechenzeichen fehlen?




 90 36 = 25 29


 8 7 = 24 32


 84 35 = 61 12


 29 38 = 81 14


 26 17 = 63 7

 6 9 = 80 26

 45 18 = 27 36

 75 47 = 7 4

 25 43 = 2 34

 6 4 = 3 8

/

- / +

- / -

- / ÷

+ / +






• / +

- / •

+ / -

+ / •

• / -





Welche Rechenzeichen fehlen?



$82 \bigcirc 70 = 3 \bigcirc 4$

$37 \bigcirc 15 = 28 \bigcirc 24$

$19 \bigcirc 37 = 7 \bigcirc 8$

$64 \bigcirc 55 = 45 \bigcirc 5$

$2 \bigcirc 28 = 7 \bigcirc 8$

$83 \bigcirc 17 = 94 \bigcirc 28$






$9 \bigcirc 9 = 100 \bigcirc 19$

$96 \bigcirc 33 = 15 \bigcirc 48$

$29 \bigcirc 33 = 78 \bigcirc 16$

$2 \bigcirc 45 = 35 \bigcirc 55$











Welche Rechenzeichen fehlen?




 15 13 = 4 7


 78 73 = 35 7


 42 7 = 54 9


 27 18 = 61 16


 9 6 = 90 36

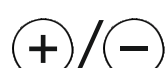
 7 4 = 18 10






 4 8 = 2 16

 82 43 = 64 25

 58 37 = 3 7

 27 43 = 32 38







Welche Rechenzeichen fehlen?



65 ○ 17 = 6 ○ 8

63 ○ 35 = 71 ○ 43

3 ○ 6 = 2 ○ 9

100 ○ 2 = 17 ○ 33

4 ○ 9 = 82 ○ 46

16 ○ 4 = 28 ○ 7





3 ○ 7 = 90 ○ 9

4 ○ 5 = 12 ○ 8

34 ○ 19 = 96 ○ 43

64 ○ 8 = 25 ○ 17







Welche Rechenzeichen fehlen?



36 4 = 83 74

54 36 = 2 9

100 4 = 5 5

80 76 = 36 9

3 8 = 71 47

58 13 = 92 21

42 13 = 14 15

5 10 = 17 33

28 37 = 19 46

13 27 = 5 8

- / +

+ / +

• / -

÷ / -

+ / •


- / •

• / +

÷ / •

+ / -


- / ÷








Welche Rechenzeichen fehlen?





 $80 \bigcirc 4 = 46 \bigcirc 26$

 $80 \bigcirc 31 = 7 \bigcirc 7$


 $68 \bigcirc 14 = 49 \bigcirc 33$


 $90 \bigcirc 3 = 5 \bigcirc 6$


 $9 \bigcirc 3 = 52 \bigcirc 25$

 $81 \bigcirc 72 = 54 \bigcirc 6$

 $16 \bigcirc 28 = 63 \bigcirc 19$

 $92 \bigcirc 28 = 25 \bigcirc 39$

 $30 \bigcirc 34 = 8 \bigcirc 8$

 $4 \bigcirc 9 = 17 \bigcirc 19$

\oplus / \ominus

\div / \cdot

\cdot / \oplus

\ominus / \cdot

\oplus / \cdot

\div / \ominus

\cdot / \ominus

\oplus / \oplus

\ominus / \oplus

\ominus / \div

